

Directions: Read the passage below and answer the question(s) that follow.

Continents of the World



1 Using the map, which number is the continent of **South America**?

- A. 1
- B. 2
- C. 3
- D. 4
- E. 5
- F. 6
- G. 7

Master ID: 1948838 Revision: 6

Correct: B

Standards:

SOC.6.6 - G
SOC.6.6 - G1
SOC.6.6 - G1.1.2

Directions: Answer the following question(s) relating to the passage titled "Continents of the World".

2 Using the map, which number is the continent of **North America**?

- A. 1
- B. 2
- C. 3
- D. 4
- E. 5
- F. 6
- G. 7

Master ID: 1948835 Revision: 4
Correct: A
Standards:
SOC.6.6 - G
SOC.6.6 - G1
SOC.6.6 - G1.1.2

3 Using the map, which number is the continent of **Australia**?

- A. 1
- B. 2
- C. 3
- D. 4
- E. 5
- F. 6
- G. 7

Master ID: 1948833 Revision: 4
Correct: G
Standards:
SOC.6.6 - G
SOC.6.6 - G1
SOC.6.6 - G1.1.2

Directions: Answer the following question(s) relating to the passage titled "Continents of the World".

4 Using the map, which number is the continent of **Asia**?

- A. 1
- B. 2
- C. 3
- D. 4
- E. 5
- F. 6
- G. 7

Master ID: 1948831 Revision: 3
Correct: F
Standards:
SOC.6.6 - G
SOC.6.6 - G1
SOC.6.6 - G1.1.2

5 Using the map, which number is the continent of **Antarctica**?

- A. 1
- B. 2
- C. 3
- D. 4
- E. 5
- F. 6
- G. 7

Master ID: 1948829 Revision: 3
Correct: C
Standards:
SOC.6.6 - G
SOC.6.6 - G1
SOC.6.6 - G1.1.2

Directions: Answer the following question(s) relating to the passage titled "Continents of the World".

6 Using the map, which number is the continent of **Europe**?

- A. 1
- B. 2
- C. 3
- D. 4
- E. 5
- F. 6
- G. 7

Master ID: 1948834 Revision: 4
Correct: **D**
Standards:
SOC.6.6 - G
SOC.6.6 - G1
SOC.6.6 - G1.1.2

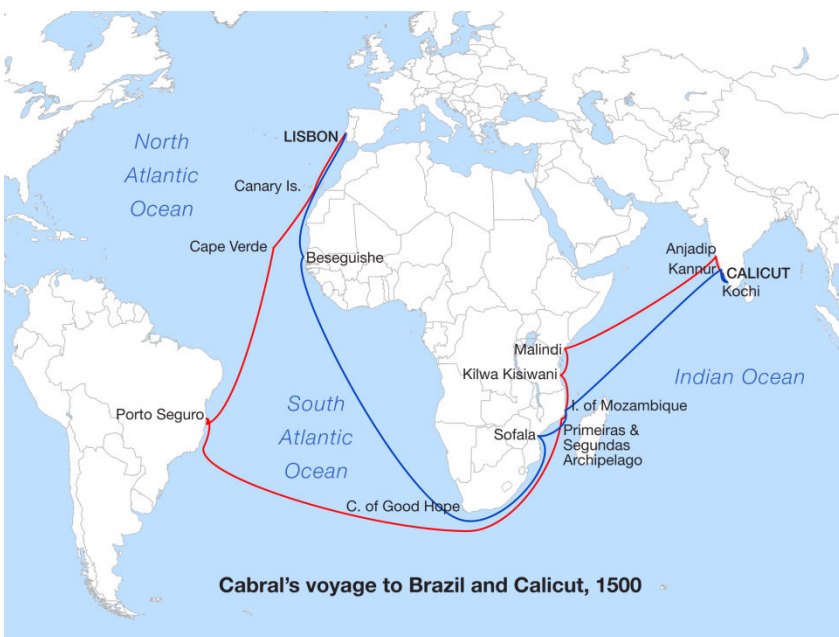
7 Using the map, which number is the continent of **Africa**?

- A. 1
- B. 2
- C. 3
- D. 4
- E. 5
- F. 6
- G. 7

Master ID: 1948823 Revision: 3
Correct: **E**
Standards:
SOC.6.6 - G
SOC.6.6 - G1
SOC.6.6 - G1.1.2

Directions: Answer the following question(s).

- 8 During the 1500's, explorers sailing from the Atlantic Ocean to the Indian Ocean had to sail around which continent?



- A. North America
- B. Australia
- C. Africa
- D. South America

Master ID: 1951842 Revision: 2
Correct: C
Standards:
SOC.6.6 - G
SOC.6.6 - G1
SOC.6.6 - G1.1.1

Directions: Answer the following question(s).

9 Lansing, Michigan is at 42° N, 84° W. Which **theme** of geography does this describe?

- A. Place
- B. Region
- C. Location
- D. Movement

Master ID: 1951826 Revision: 1

Correct: C

Standards:

SOC.6.6 - G

SOC.6.6 - G1

SOC.6.6 - G1.3.1

Directions: Answer the following question(s).

10 Which theme of geography does the picture below illustrate?



- A. Place
- B. Region
- C. Location
- D. Movement

Master ID: 1951824 Revision: 2
Correct: A
Standards:
SOC.6.6 - G
SOC.6.6 - G1
SOC.6.6 - G1.3.1

Directions: Answer the following question(s).

11 GIS is an example of internet-based mapping technology. What does **GIS** stand for?

- A. Global Integrated Systems
- B. Global Information Systems
- C. Globalization Information Structure
- D. Global Intelligence Service

Master ID: 1951792 Revision: 1

Correct: **B**

Standards:

SOC.6.6 - G

SOC.6.6 - G1

SOC.6.6 - G1.2.5

12 Which of the following would a geographer use to provide individuals with an exact location?

- A. GPS
- B. Storm Tracking Technology
- C. Population Map
- D. Political Map

Master ID: 1951790 Revision: 4

Correct: **A**

Standards:

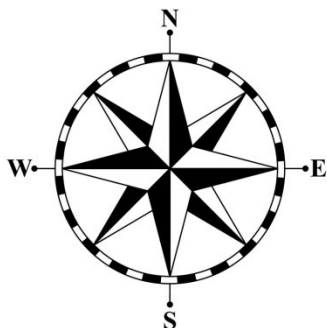
SOC.6.6 - G

SOC.6.6 - G1

SOC.6.6 - G1.2.5

Directions: Answer the following question(s).

- 13 Which part of a map is shown in the graphic below?



- A. Map Title
- B. Scale
- C. Key
- D. Compass Rose

Master ID: 1951788 Revision: 1
Correct: D
Standards:
SOC.6.6 - G
SOC.6.6 - G1
SOC.6.6 - G1.1.1

- 14 Which of the following is most likely to be shown on a map, but **not** a globe?

- A. Countries
- B. Election Results
- C. Major Landmasses
- D. Bodies of Water

Master ID: 1951786 Revision: 2
Correct: B
Standards:
SOC.6.6 - G
SOC.6.6 - G1
SOC.6.6 - G1.1.1

Directions: Answer the following question(s).

15 Which type of area is shown in the picture below?



- A. Urban
- B. Rural
- C. Desert
- D. Tropical

Master ID: 1951785 Revision: 1
Correct: **B**
Standards:
SOC.6.6 - G
SOC.6.6 - G1
SOC.6.6 - G1.2.2

Directions: Answer the following question(s).

16 In the map below, which number represents a desert region?



- A. 1 Washington
- B. 2 Illinois
- C. 3 Arizona
- D. 4 Florida

Master ID: 1951773 Revision: 3

Correct: C

Standards:

SOC.6.6 - G
SOC.6.6 - G1
SOC.6.6 - G1.2.2

Directions: Answer the following question(s).

- 17 Which of these features would you expect to find on a map of the mountain ranges of the world?
- A. Election Results
 - B. Elevation
 - C. Population Density
 - D. Political Boundaries

Master ID: 1951765 Revision: 3

Correct: **B**

Standards:

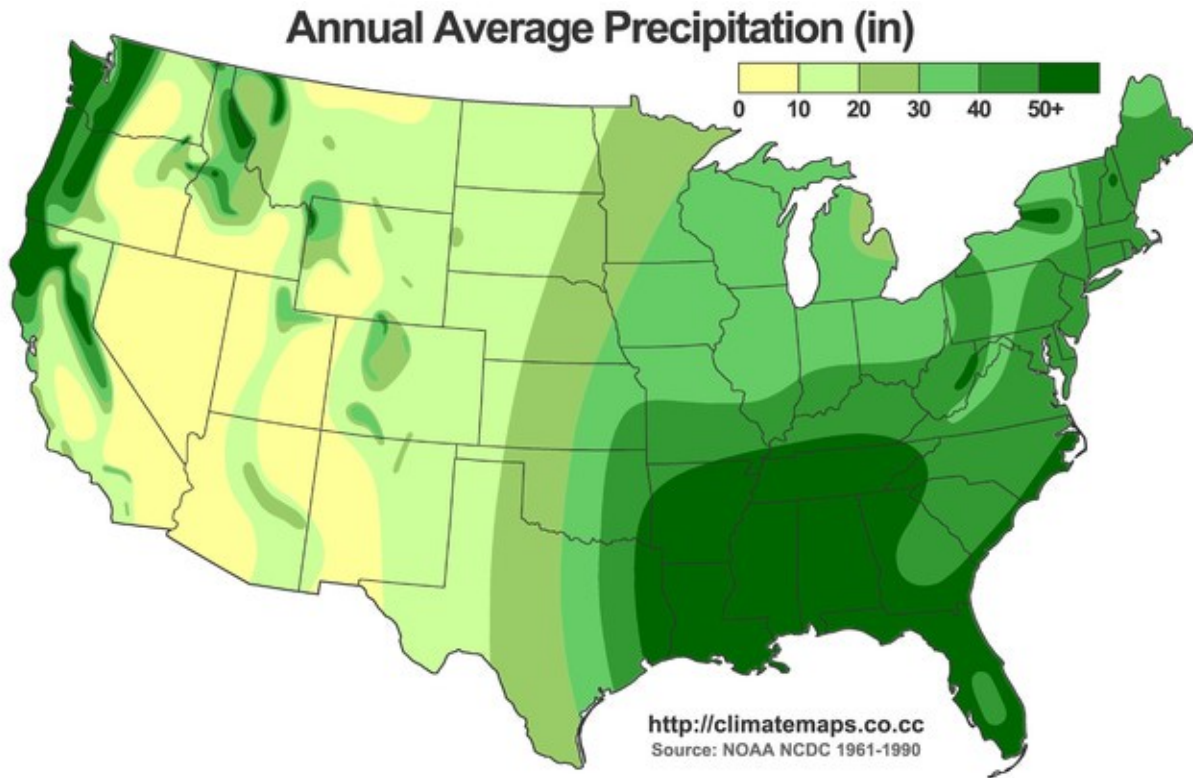
SOC.6.6 - G

SOC.6.6 - G1

SOC.6.6 - G1.2.2

Directions: Answer the following question(s).

- 18 Using the map below, which of the following statements is true?



- A. The areas with the most rainfall are in the Southwest.
- B. The central part of the United States receives the least rainfall.
- C. The eastern and western coasts both receive less than 20 inches of rainfall yearly.
- D. The southeastern half of the United States receives 40+ inches of rainfall each year.

Master ID: 1948928 Revision: 3

Correct: D

Standards:

SOC.6.6 - G
SOC.6.6 - G1
SOC.6.6 - G1.1.1

Directions: Answer the following question(s).

19 Which part of a map will help a person understand what the different lines and symbols represent?

- A. Title
- B. Scale
- C. Key
- D. Compass Rose

Master ID: 1948919 Revision: 2
Correct: C
Standards:
SOC.6.6 - G
SOC.6.6 - G1
SOC.6.6 - G1.1.1

20 Which of the following is a way that maps and globes differ?

- A. Maps are easier to store and carry.
- B. Globes show more detailed information than maps.
- C. Maps are more accurate than globes.
- D. Globes distort physical reality.

Master ID: 1948914 Revision: 2
Correct: A
Standards:
SOC.6.6 - G
SOC.6.6 - G1
SOC.6.6 - G1.1.1

Directions: Answer the following question(s).

21



Which step in the **geographic inquiry process** does the picture above demonstrate?

- A. answering geographic questions
- B. asking geographic questions
- C. organizing geographic information
- D. acquiring geographic information

Master ID: 1948882 Revision: 4
Correct: D
Standards:
SOC.6.6 - G
SOC.6.6 - G1
SOC.6.6 - G1.2.6

22 Which of the following is an example of a global problem?

- A. A flood in the Mississippi
- B. Pollution in the Detroit River
- C. Climate Change
- D. A hurricane in New Orleans

Master ID: 1948877 Revision: 1
Correct: C
Standards:
SOC.6.6 - G
SOC.6.6 - G1
SOC.6.6 - G1.2.6

Directions: Answer the following question(s).

- 23 Using clues from the picture, what is the **best** reason for the location of the center of this city?



- A. The dark areas represent cities.
- B. The bright areas are more densely populated.
- C. The dark areas represent the lakes of the United States.
- D. People don't like to be near each other.

Master ID: 1948868 Revision: 4

Correct: B

Standards:

SOC.7.7 - G1.2.3
SOC.6.6 - G
SOC.6.6 - G1
SOC.6.6 - G1.2.4

Directions: Answer the following question(s).

24 What is the name of the **process** that geographers use to study and solve a variety of problems around the world?

- A. Geographic Inquiry
- B. Observation
- C. Interviews
- D. Map Skills

Master ID: 1948859 Revision: 2

Correct: A

Standards:

SOC.6.6 - G
SOC.6.6 - G1
SOC.6.6 - G1.2.6

25 The Capitol building in Lansing, Michigan is an example of which type of geography?

- A. Physical
- B. Climate
- C. Human
- D. Map

Master ID: 1948846 Revision: 2

Correct: C

Standards:

SOC.6.6 - G
SOC.6.6 - G1
SOC.6.6 - G1.3.2

Directions: Answer the following question(s).

26 Which of the following can be used to locate places on earth?

- A. Population
- B. Latitude & Longitude
- C. Economic Activity
- D. Culture

Master ID: 1948842 Revision: 4

Correct: **B**

Standards:

SOC.6.6 - G

SOC.6.6 - G1

SOC.6.6 - G1.3.2

Directions: Answer the following question(s).

- 27 If Geospatial technologies such as the Global Positioning System (GPS) or remote sensing suddenly stopped working for a week or two, what would happen? How would society be affected? Explain your answer.

Write your answer in the space below.

Master ID: 1951796 Revision: 1

Rubric: 3 Point(s)

- 3 The response provides a logical and complete answer to the question and includes examples that provide detail and appropriate descriptions. Possible examples might include:

- travel would be difficult
- economy at risk/affected
- aircraft could be lost
- delivery of goods slow down
- earth imaging would be difficult
- weather would be less predictable
- communication would be limited

- 2 The response is reasonable and some examples are provided, but it lacks a clear understanding of how society would be affected.

- 1 The response makes an attempt to answer the question, but provides limited understanding and/or examples.

- 0 The response is blank or unclear.

Standards:

SOC.6.6 - G

SOC.6.6 - G1

SOC.6.6 - G1.2.5

Directions: Answer the following question(s).

28 One of the five themes of geography is **Human/Environment Interaction**.

- Provide at least **one example** of how **people affect the environment**.
- Provide at least **one example** of how the **environment affects people**.

Write your answer in the space below.

Master ID: 1951813 Revision: 2

Rubric: 2 Point(s)

- 2 The response provides **2** examples of how people and the environment affect each other.
- 1 The response provides **1** example of how people and the environment affect each other.
- 0 The response is blank or unclear.

Standards:

SOC.6.6 - G

SOC.6.6 - G1

SOC.6.6 - G1.3.1