



Directions: Answer the following question(s).

Section

- 1 How are most communities divided?
- A. into different places where people work, play, live and shop
  - B. into places with streets
  - C. into places with people and without people
- 2 What might be found in a community where people play?
- A. bank
  - B. factory
  - C. park
- 3 Which building is a place where people live in a community?
- A. store
  - B. house
  - C. school

Directions: Answer the following question(s).

4 Look at the map key below.

Map Key	
	Birds of the World
	Butterfly Garden
	Gorilla Forest
	Reptile House
	Seal Rock
	Tiger Reserve
	Water
	Building

What does the symbol  mean on the map key?

- A. Building
- B. Birds of the World
- C. Butterfly Garden

Directions: Answer the following question(s).

5 Look at the map key below.



What is a natural characteristic found on the map key?

- A. building
- B. water
- C. reptile house

6 Which of the following are true about map keys or legends? Choose all that are correct.

- A. they provide information needed to make the map make sense
- B. they might use symbols or colors to represent things
- C. they might include pictures or icons to represent things
- D. they are always located in the right corner of the map

Directions: Answer the following question(s).

7 Which is a form of transportation?

- A. bridge
- B. road
- C. bus

8 Which type of transportation is a way people move by water?

- A. boats
- B. buses
- C. helicopter

9 A grocery store needs apples. What form of transportation could be used to get the apples there?

- A. apple orchard
- B. truck
- C. highway

10 What does a negative consequence mean?

- A. when good things happen as a result of an action a group or person takes
- B. when bad things happen as a result of an action a group or person takes
- C. when bad things happen in nature

11 What does a positive consequence mean?

- A. when something good happens because of a person or a group of people
- B. when something good happens because of the weather
- C. when something does not work out as planned

12 Which of the following is a way in which people can create a positive consequence in a community?

- A. littering
- B. eating candy
- C. planting a tree

Directions: Answer the following question(s).

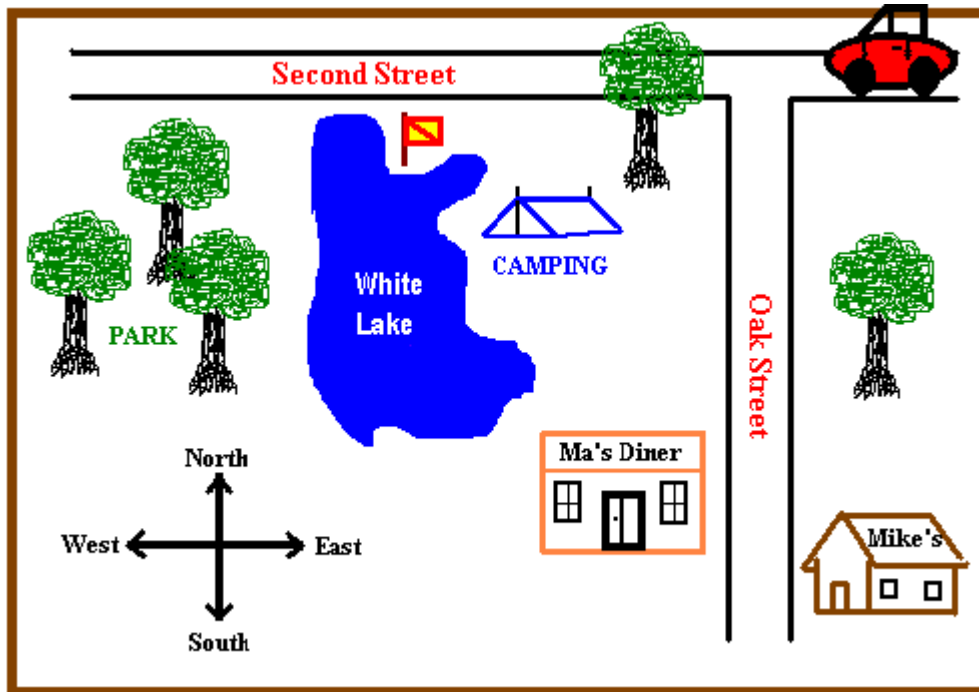
- 13 Which of the following is a way in which people take care of their community?
- A. picking up trash from the street
  - B. putting away toys on a shelf
  - C. going to school on time
- 14 Which set of regions goes from smallest to largest?
- A. country-----state-----community
  - B. community-----country-----state
  - C. community-----state-----country
- 15 Which region is smaller than a state?
- A. country
  - B. world
  - C. community
- 16 Which is a small body of fresh water that has land all around it?
- A. lake
  - B. pond
  - C. river
- 17 What landform is a low land between mountains?
- A. valley
  - B. plain
  - C. hill
- 18 A group of second grade students went to the park. They ate candy bars and left the wrappers on the ground. Describe one possible consequence of this behavior and identify whether this is a positive or negative consequence.

Write your answer in the space below.

Directions: Read the passage below and answer the question(s) that follow.

### Instructions for questions 19 through 20

Look at the map below and answer the following questions.

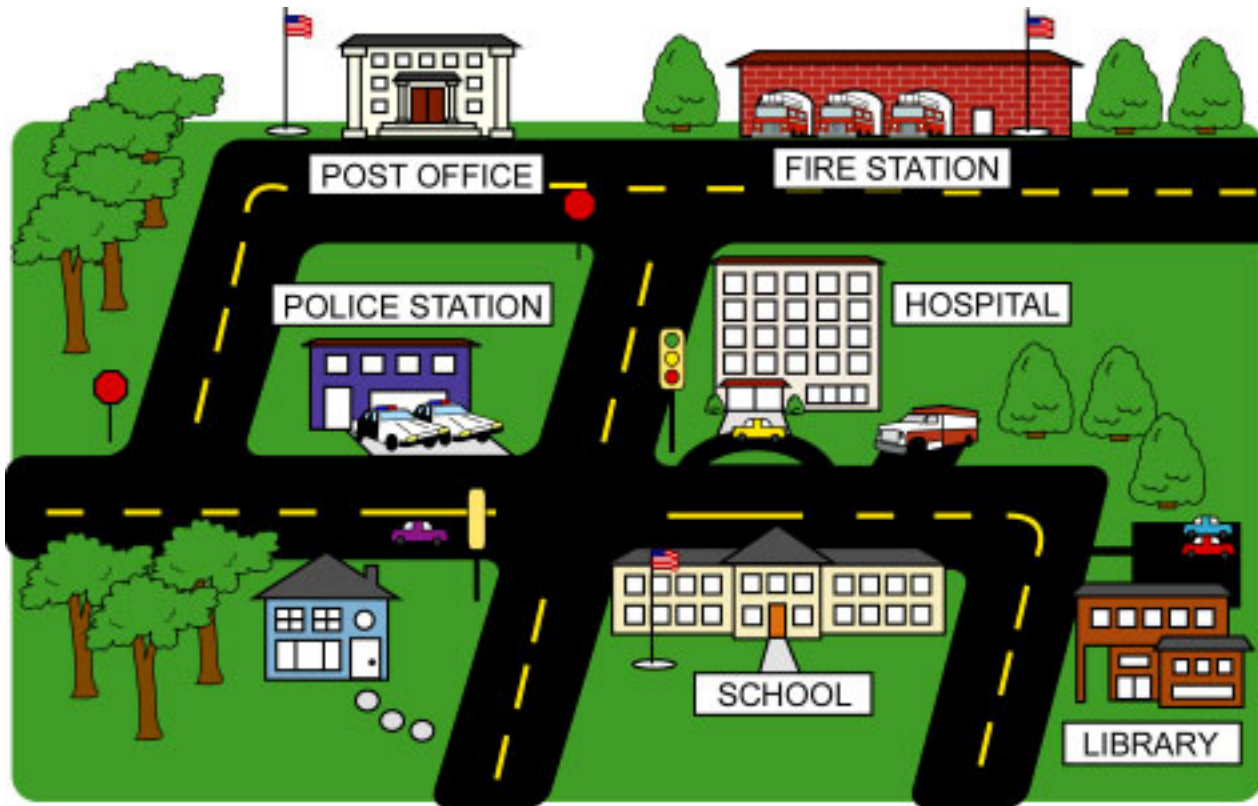


- 19 A person is going from the park to the campground. What direction are they going?
- A. north
  - B. south
  - C. east
- 20 Which statement is true about Mike's house?
- A. Mike's house is next to Oak Street.
  - B. Mike's house is across from the campground.
  - C. Mike's house is near the car.

Directions: Read the passage below and answer the question(s) that follow.

### Transportation

Choose the best answer.



21 Describe 2 different ways that a person could travel from school to the post office.

Write your answer in the space below.

22 Describe 2 forms of transportation that are shown in the picture.

Write your answer in the space below.