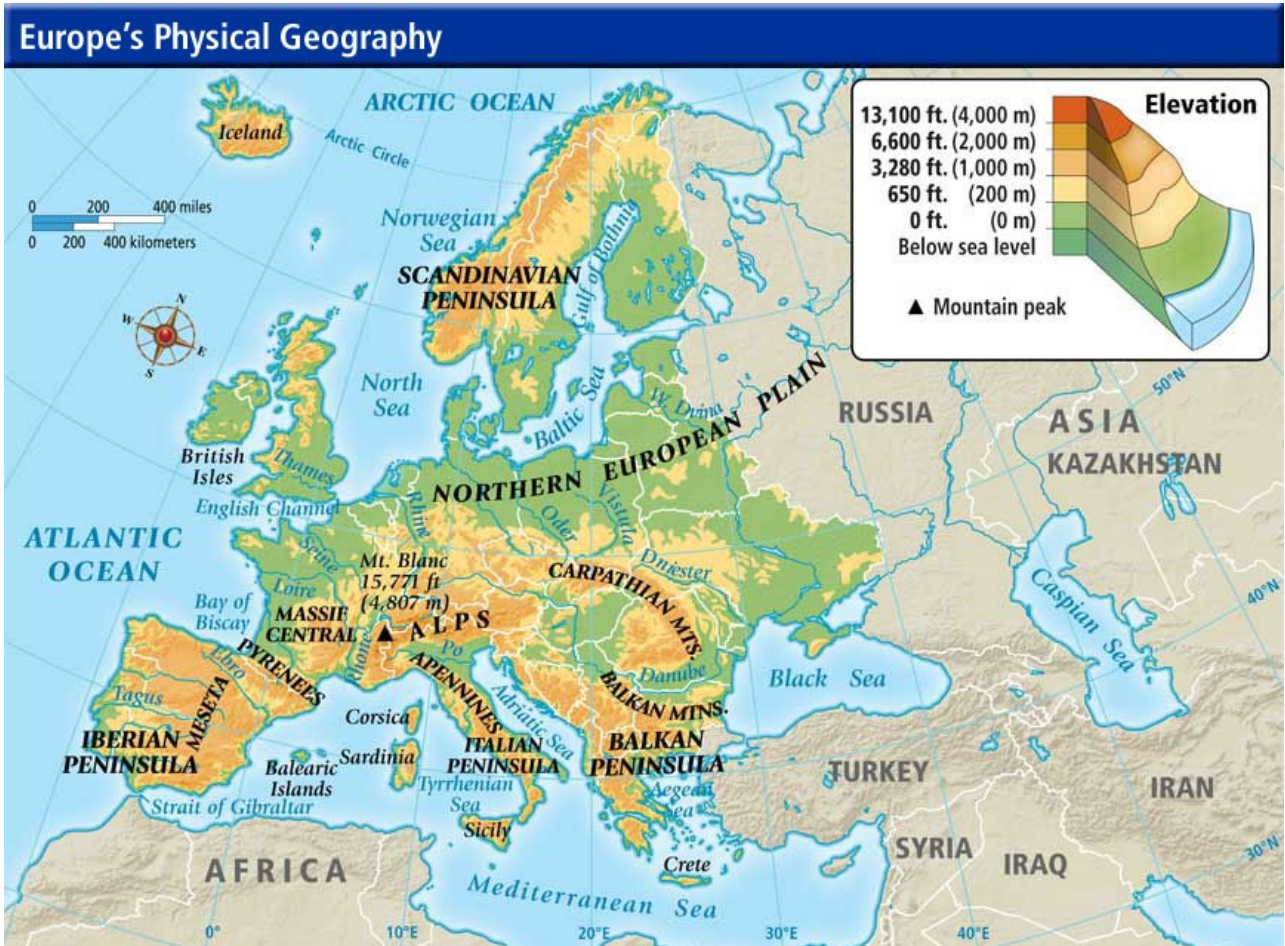


Directions: Answer the following question(s).

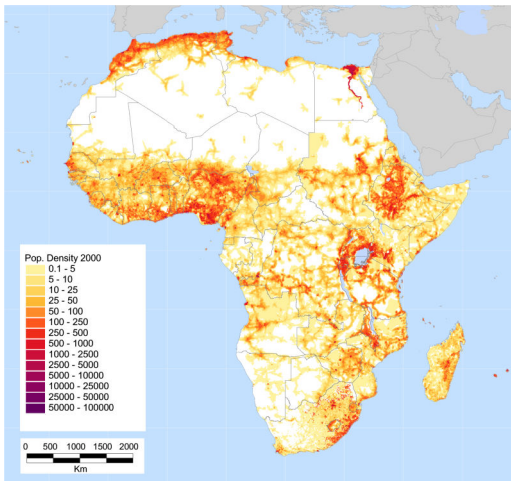
- 1 Study the map to explain which physical feature **most** challenges the people of Europe?



- A. Numerous river systems
- B. Availability of fresh water
- C. Multiple mountain ranges
- D. Access to the Mediterranean Sea

Directions: Answer the following question(s).

- 2 View the map below and select the best reason why most of the northern area of Africa has a low population density.



- A. The northern area of Africa is the Sahara Desert.
- B. The northern area of Africa is very mountainous.
- C. The northern area of Africa has had many wars.
- D. The northern area of Africa is dangerous due to a high frequency of tornadoes.

Directions: Answer the following question(s).

- 3 How would you best classify the picture below using one of the Five Themes of Geography?



- A. Human Environmental Interaction
- B. Region
- C. Movement
- D. Place

Directions: Answer the following question(s).

4 1600 Pennsylvania avenue is an example of which of Five Themes of Geography?

- A. Place
- B. Region
- C. Location
- D. Movement

5 This image shows mining of natural resources. Which of the Five Themes of Geography does this represent?



- A. Place
- B. Location
- C. Movement
- D. Human Environmental Interaction

Directions: Answer the following question(s).

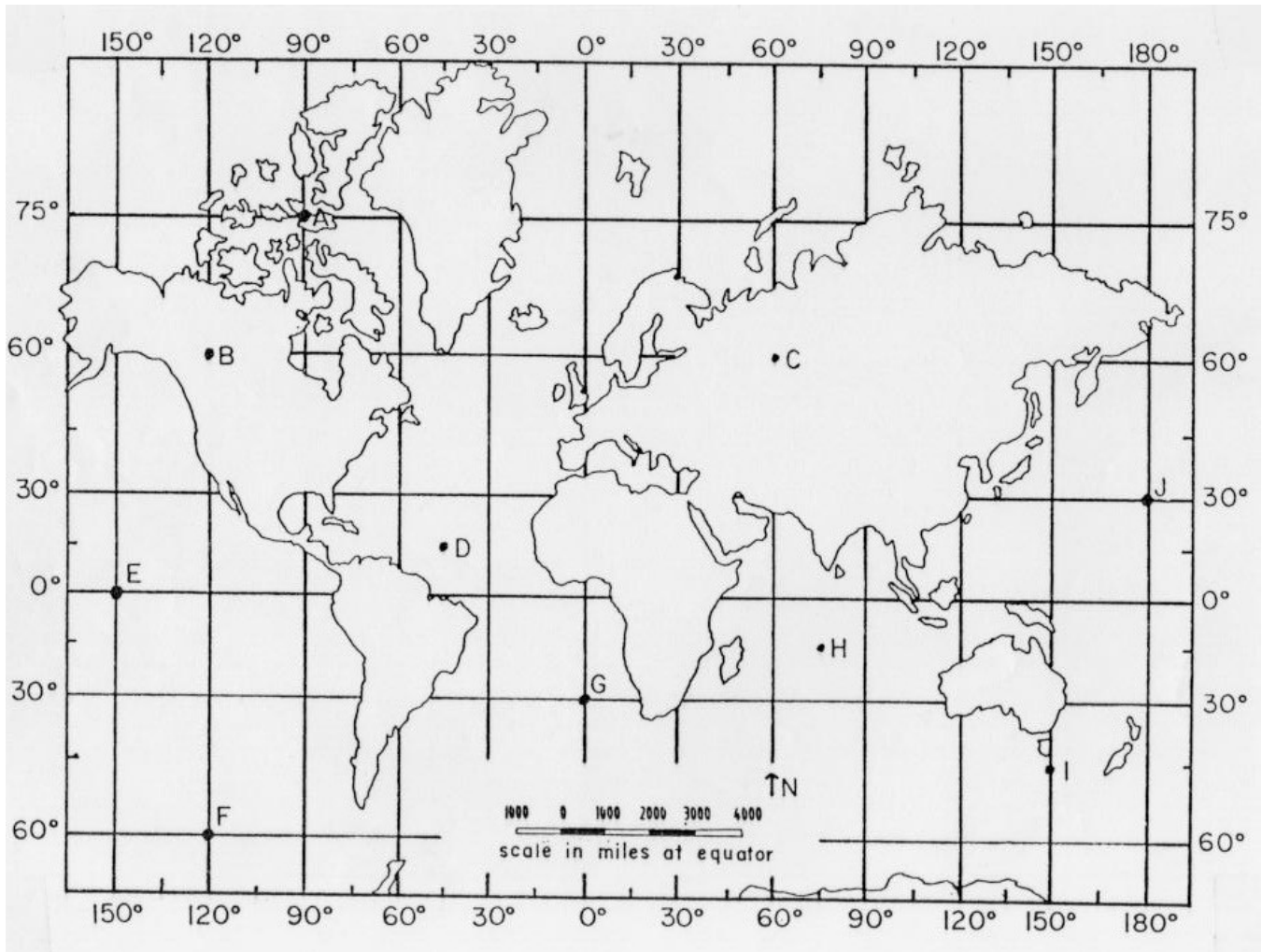
6 What category was used to place Michigan into the Great Lakes Region?



- A. Geographic
- B. Climate
- C. Economic
- D. Historical

Directions: Read the passage below and answer the question(s) that follow.

Climate Zone



7 How would you classify the climate zone for location of letter D?

- A. Low latitude (tropical)
- B. Middle latitude (temperate)
- C. High latitude (polar)
- D. Dry (desert)

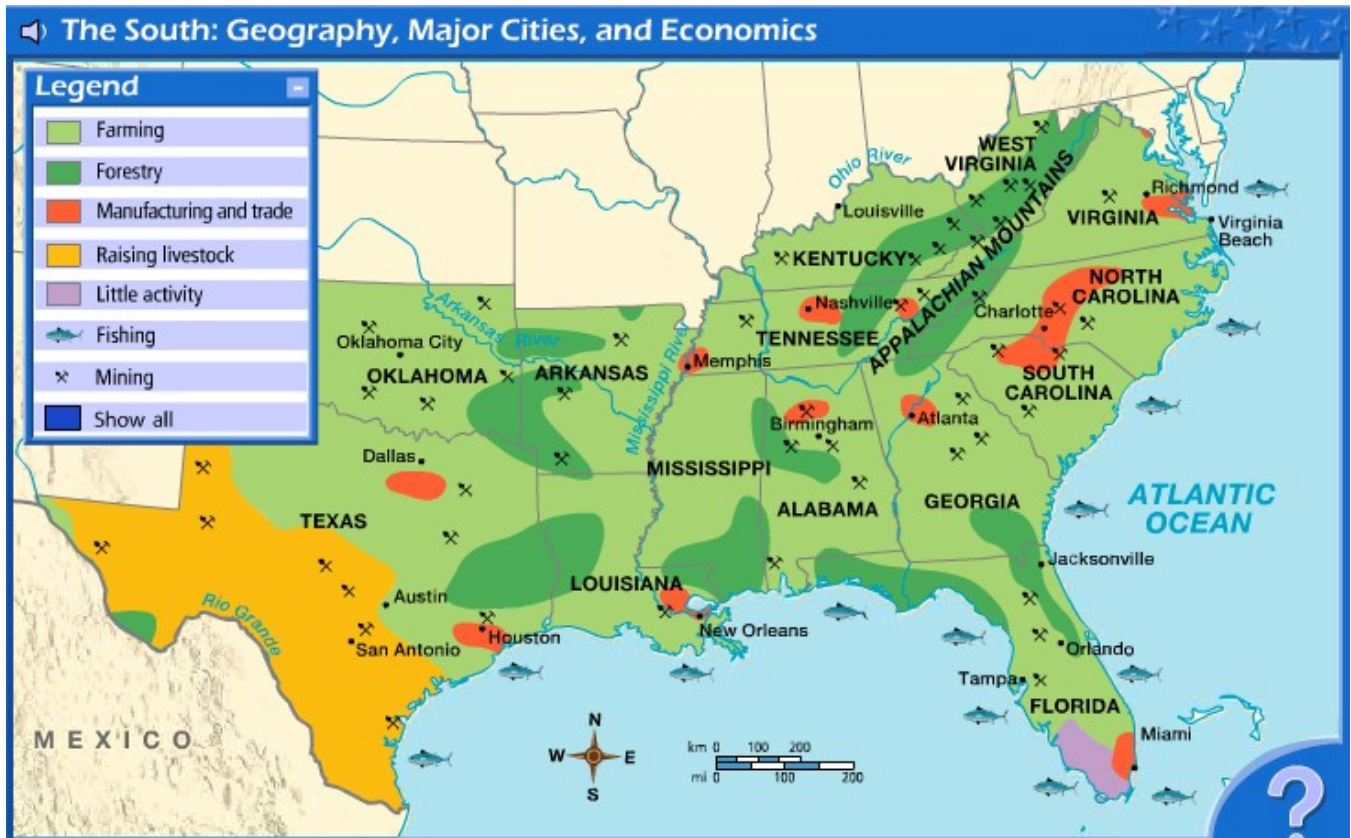
Directions: Answer the following question(s) relating to the passage titled "Climate Zone".

8 Which letter is at the absolute location of 30°S , 0° ?

- A. E
- B. G
- C. H
- D. F

Directions: Read the passage below and answer the question(s) that follow.

The South: Geography, Major Cities, and Economics



- 9 What is the relative direction of Jacksonville to Atlanta?
- Northwest
 - Northeast
 - North
 - West
- 10 Identify which major natural characteristic makes New Orleans an international city for trade.
- A sub-tropical climate which attracts a large population
 - Local fertile soil for farming
 - A large amount of minerals in the Appalachian Mountains
 - The Mississippi River System to the Gulf of Mexico

Directions: Answer the following question(s) relating to the passage titled "The South: Geography, Major Cities, and Economics".

11 Using the scale, estimate the distance between Dallas and Houston.

- A. About 400 miles
- B. About 300 miles
- C. About 200 miles
- D. About 500 miles

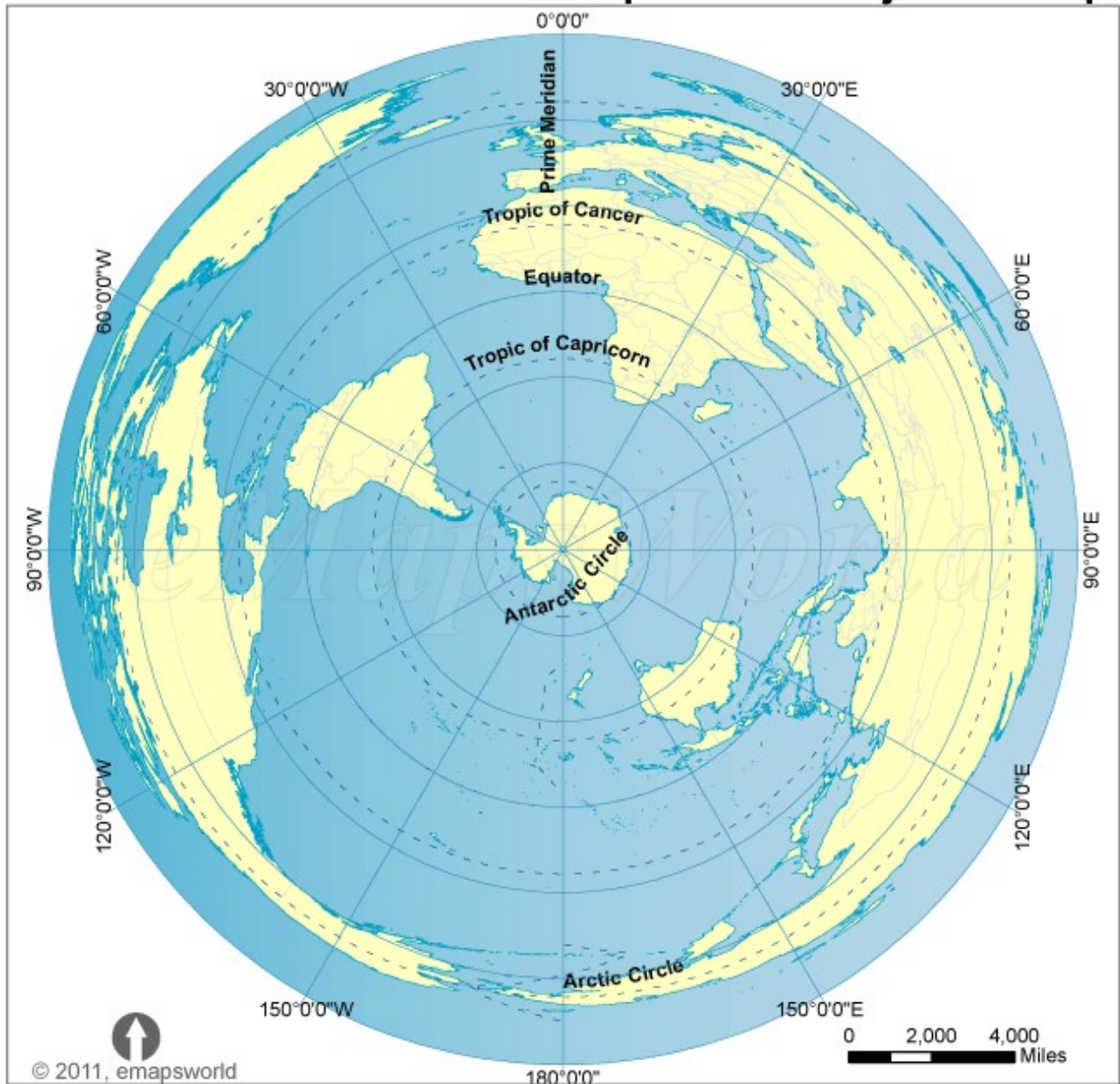
12 What economic activity is represented by this symbol  ?

- A. fishing
- B. mining
- C. raising livestock
- D. forestry

Directions: Answer the following question(s).

- 13 Which person's point of view would this map projection best serve?

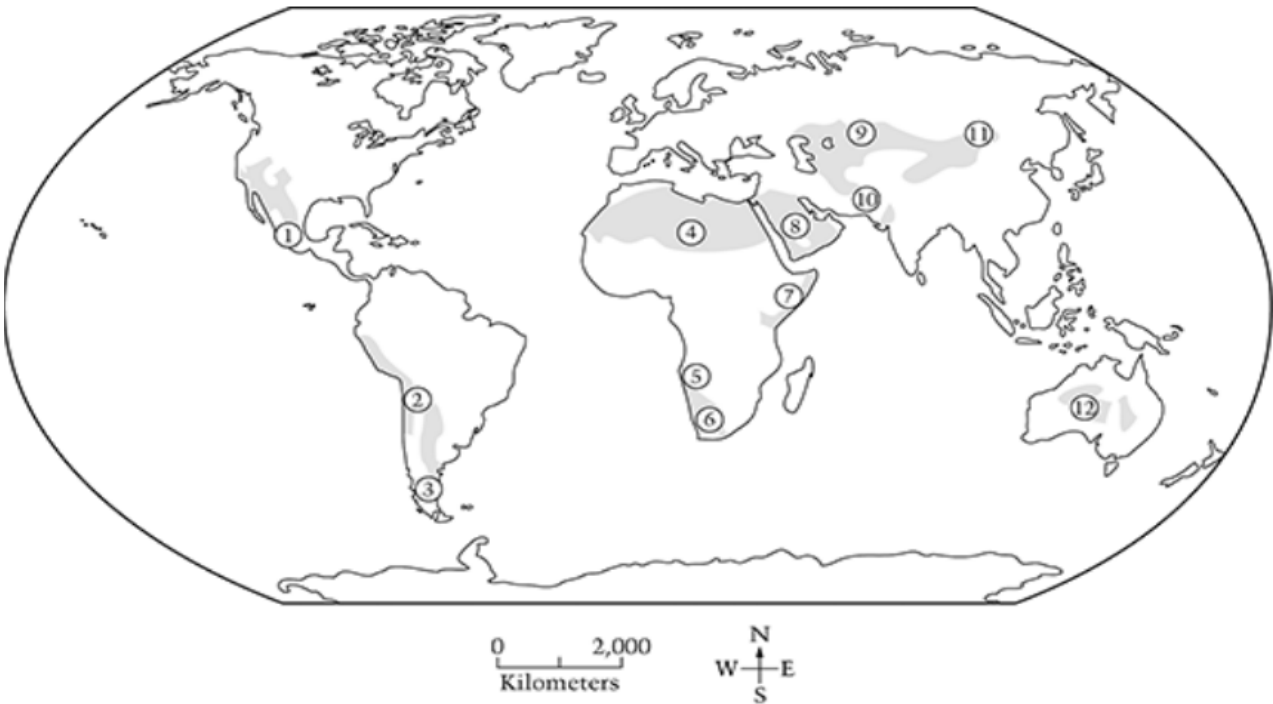
World South Pole Azimuthal Equidistant Projection Map



- A. Antarctic scientist studying climate change
- B. African farmer irrigating his crops
- C. Airline Pilot flying from France to the U.S.
- D. Scientist from Greenland measuring glacier growth

Directions: Answer the following question(s).

- 14 What physical feature does the shaded area on the map represent?



- A. forest
- B. ocean
- C. desert
- D. mountains

- 15 What is one of the benefits of using a globe instead of a map?

- A. accuracy
- B. weight
- C. multiple purpose
- D. inaccuracy

Directions: Answer the following question(s).

- 16 What is one of the benefits of using a map instead of a globe?
- A. accuracy
 - B. land shapes
 - C. multiple purposes
 - D. land size
- 17 Clearing the Amazon Rainforest for farming is an example of which of the five themes of geography?
- A. Location
 - B. Place
 - C. Movement
 - D. Human Environmental Interaction
- 18 Based on these two pictures, which ecosystem, desert or rainforest, would have the most available resources?



- A. rainforest
- B. desert

Directions: Answer the following question(s).

- 19 Compare the consequence of a natural disaster between developed and developing countries, like Haiti (earthquake) and Japan (tsunami). Use the factors in the box and match them to each country's preparedness. You may create a table similar to the one below to help your organization or write your response in a paragraph.

warning signals/sirens	poor construction	strict building codes
no available technology/warning system	government emergency program	
little to no government aid		

Developed (Japan)	Developing (Haiti)

Write your answer in the space below.

- 20 Choose an ecosystem and describe how humans in that ecosystem could benefit by adding technology? Possible ecosystems include: desert, rainforest, floodplain, or tundra. Use the space below to write your answer.

Write your answer in the space below.

Directions: Answer the following question(s).

- 21 What are two opportunities and two challenges for humans living near the Mississippi and Ohio Rivers?



Write your answer in the space below.