

Directions: Answer the following question(s).

1

Region	Birthrate	Death Rate	Rate of Natural Increase
Panama	19.2	4.7	?
Canada	10.3	8	?
India	20.6	7.4	?
Cameroon	32.5	11.7	?

Which country has the highest rate of natural population increase?

- A. Panama
- B. Canada
- C. India
- D. Cameroon

Master ID: 1953127 Revision: 3
 Correct: D
 Standards:
 SOC.6.6 - G1.2.3

2

Which statement **best** explains why a country may have a zero natural population increase?

- A. The fertility rate is zero.
- B. The death rate is zero.
- C. Birthrate and death rate are the same.
- D. Birthrate and death rate are not equal.

Master ID: 1953116 Revision: 2
 Correct: C
 Standards:
 SOC.6.6 - G1.1.1
 SOC.6.6 - G1.2.3

Directions: Answer the following question(s).

3



Which of the following statements most accurately summarizes this picture?

- A. Urbanization is the movement of people from urban to rural areas, so now many more people live on farms.
- B. The pace of urbanization is slowing down across the globe.
- C. Urbanization comes with problems such as pollution, congestion, and especially lack of green space.
- D. Urbanization rarely occurs along waterways and coastal areas.

Master ID: 1952981 Revision: 2

Correct: C

Standards:

SOC.6.6 - G1.3.2

SOC.6.6 - G5.1.1

Directions: Answer the following question(s).

- 4 The distribution and density of people on the Earth is related to differences in geographical features, resources, and the availability of things such as jobs, food, water, and transportation. What does **population density** tell us?
- A. The number of people in a defined area such as a square mile
 - B. The overall population of an area
 - C. The length of time that people are expected to live
 - D. The timeframe that people will migrate from an area

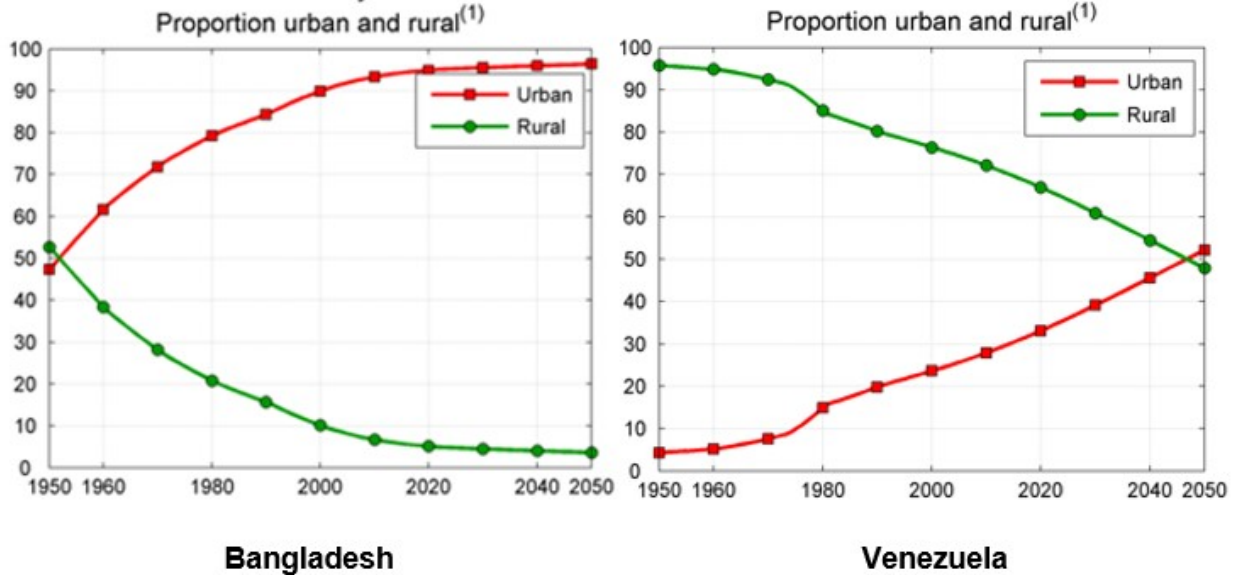
Master ID: 1952974 Revision: 1
Correct: A
Standards:
SOC.6.6 - G1.1.1

- 5 The Industrial Revolution was marked by all of the following except:
- A. The economic change from an agricultural-based economy toward machine-base manufacturing.
 - B. Inventions and technological innovations created the factory system of large-scale machine production.
 - C. Greater economic specialization occurred.
 - D. Increased use of pack animals to improve farming operations.

Master ID: 1952931 Revision: 3
Correct: D
Standards:
SOC.6.6 - G1.3.2

Directions: Answer the following question(s).

6



According to the charts above, which country can best be described as having a higher level of urbanization?

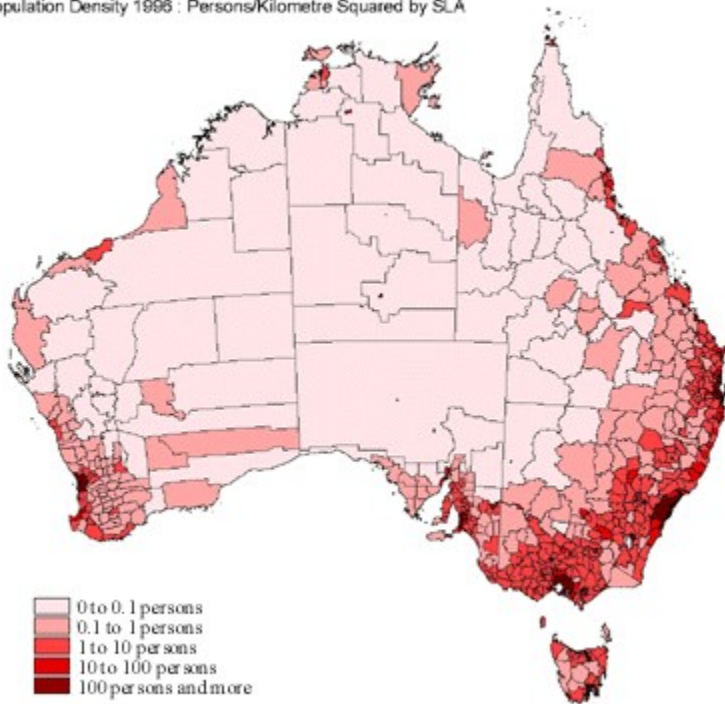
- A. Bangladesh
- B. Venezuela
- C. Both are developed
- D. Both are less developed

Master ID: 1952923 Revision: 3
Correct: A
Standards:
SOC.6.6 - G1.1.1

Directions: Answer the following question(s).

7

Population Density 1996 : Persons/Kilometre Squared by SLA



Australia's population density can **best** be described as which of the following?

- A. dense throughout the continent
- B. dense in the middle and sparse on the coasts
- C. dense on some of the coasts and sparse in the middle
- D. no one lives in Australia

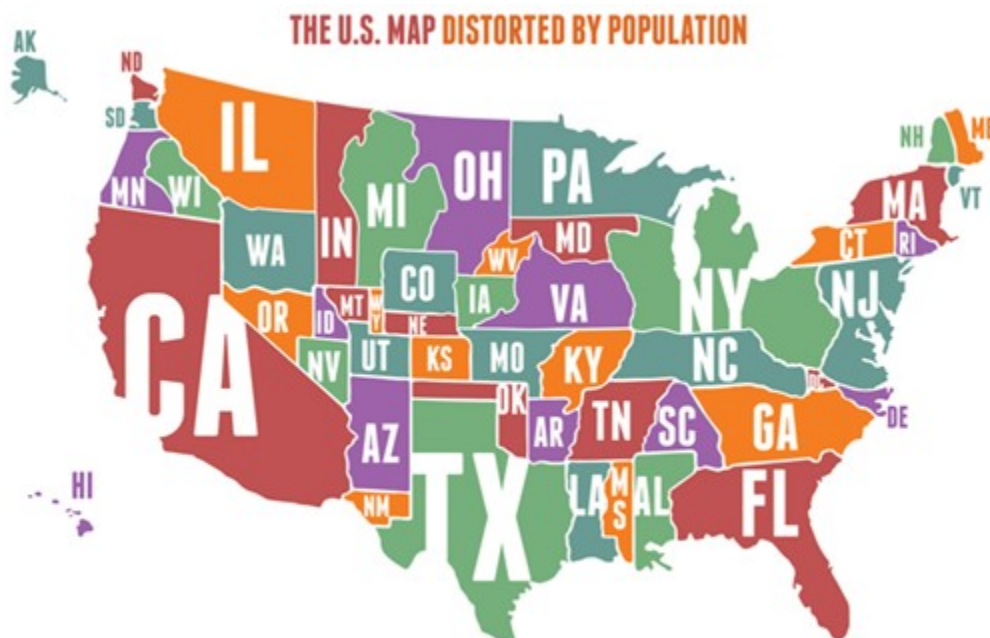
Master ID: 1953598 Revision: 2

Correct: C

Standards:
SOC.6.6 - G1.1.1

Directions: Answer the following question(s).

8



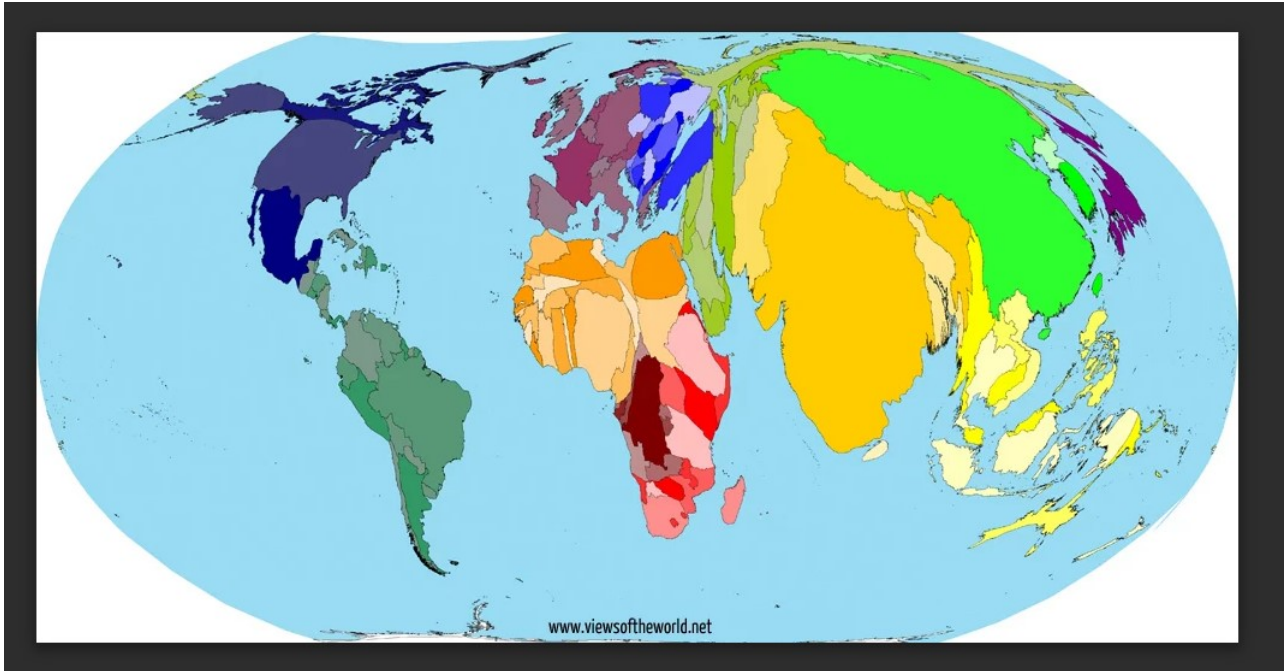
What **two** conclusions can be drawn from viewing the population cartogram of the United States?

- A. California (CA) has a large population.
- B. Kansas (KS) has a larger population than Michigan (MI).
- C. Texas (TX) has one of the smallest populations in the United States.
- D. Alaska (AK) has the largest population in the United States.
- E. New York (NY) has more people than Michigan (MI).

Master ID: 1952908 Revision: 2
Correct: AE
Standards: SOC.6.6 - C4.3.2

Directions: Answer the following question(s).

9



What does a population cartogram depict?

- A. population migration
- B. population by race
- C. population, not land area
- D. land area, not population

Master ID: 1952900 Revision: 2
Correct: C
Standards:
SOC.6.6 - G1.1.1

Directions: Answer the following question(s).

10 Select four pull factors that influence the distribution of people.

- A. stability of the government
- B. availability of jobs
- C. favorable climate
- D. fertile soil
- E. conflict
- F. crime
- G. poor education

Master ID: 1952895 Revision: 1
Correct: ABCD
Standards:
SOC.6.6 - G1.2.6

11 All of the following are current global problems, **except**:

- A. refugees and aging populations
- B. slums and air pollution
- C. rapid urbanization and high number of dependents in many countries
- D. rapid growth of wildlife habitats and abundance of green space

Master ID: 1952858 Revision: 3
Correct: D
Standards:
SOC.6.6 - G5.1.1

12 Many people from northern European countries are retiring in southern European countries where the climate is warmer. Which push/pull factor is determining this migration?

- A. Religion
- B. Economics
- C. Politics
- D. Environment

Master ID: 1952850 Revision: 1
Correct: D
Standards:
SOC.6.6 - G2.2.1

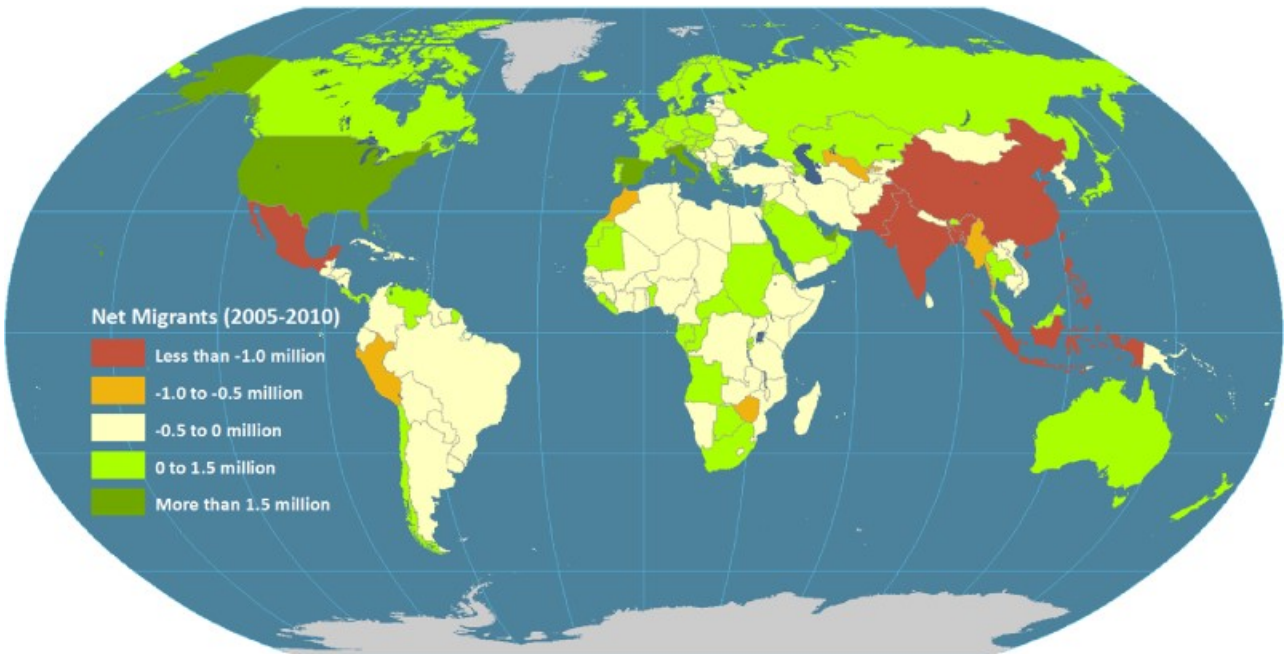
Directions: Answer the following question(s).

- 13 In China, huge numbers of farmers are being forced out of their homes and sent to small tenement apartments in urban areas. The government of China says it is helping the farmers, but the farmers feel the government is forcing them to leave. Which push/pull factor is determining this migration?

A. Religious
B. Economic
C. Political
D. Environmental

Master ID: 1952735 Revision: 1
Correct: C
Standards:
SOC.6.6 - G2.2.1

14



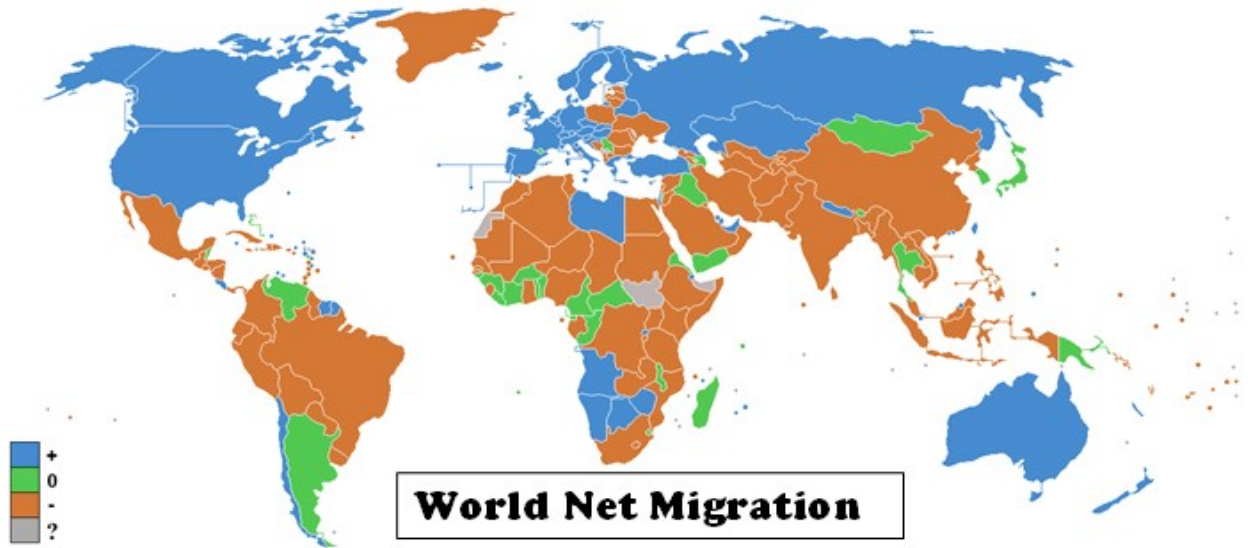
Which country on the map has the **most** new migrants?

A. United States
B. Mexico
C. India
D. Australia

Master ID: 1952732 Revision: 2
Correct: A

Directions: Answer the following question(s).

15



Based on your knowledge of world countries, how can we classify countries that have a positive net migration?

- A. More Developed
- B. Less Developed
- C. Poorly Educated
- D. Too Wealthy

Master ID: 1952730 Revision: 2
Correct: A
Standards:
SOC.6.6 - G1.2.6

16 What is the process of leaving one country to take up permanent or semi-permanent residence in another country?

- A. Immigration
- B. Emigration
- C. Net Migration
- D. Total Migration

Master ID: 1952722 Revision: 1
Correct: B
Standards:
SOC.6.6 - G1.2.6

Directions: Answer the following question(s).

- 17 **True or False?** Historians disagree as to whether hundreds of cultures were developed with different languages, types of shelters, art forms and traditions and became known as Native Americans.

- A. True
- B. False

Master ID: 1952716 Revision: 2
Correct: B
Standards:
SOC.6.6 - H1.2.4

- 18 On which continent did the first humans live?

- A. Asia
- B. Africa
- C. North America
- D. Europe

Master ID: 1952711 Revision: 1
Correct: B
Standards:
SOC.6.6 - H1.2.1
SOC.6.6 - W1.1.2

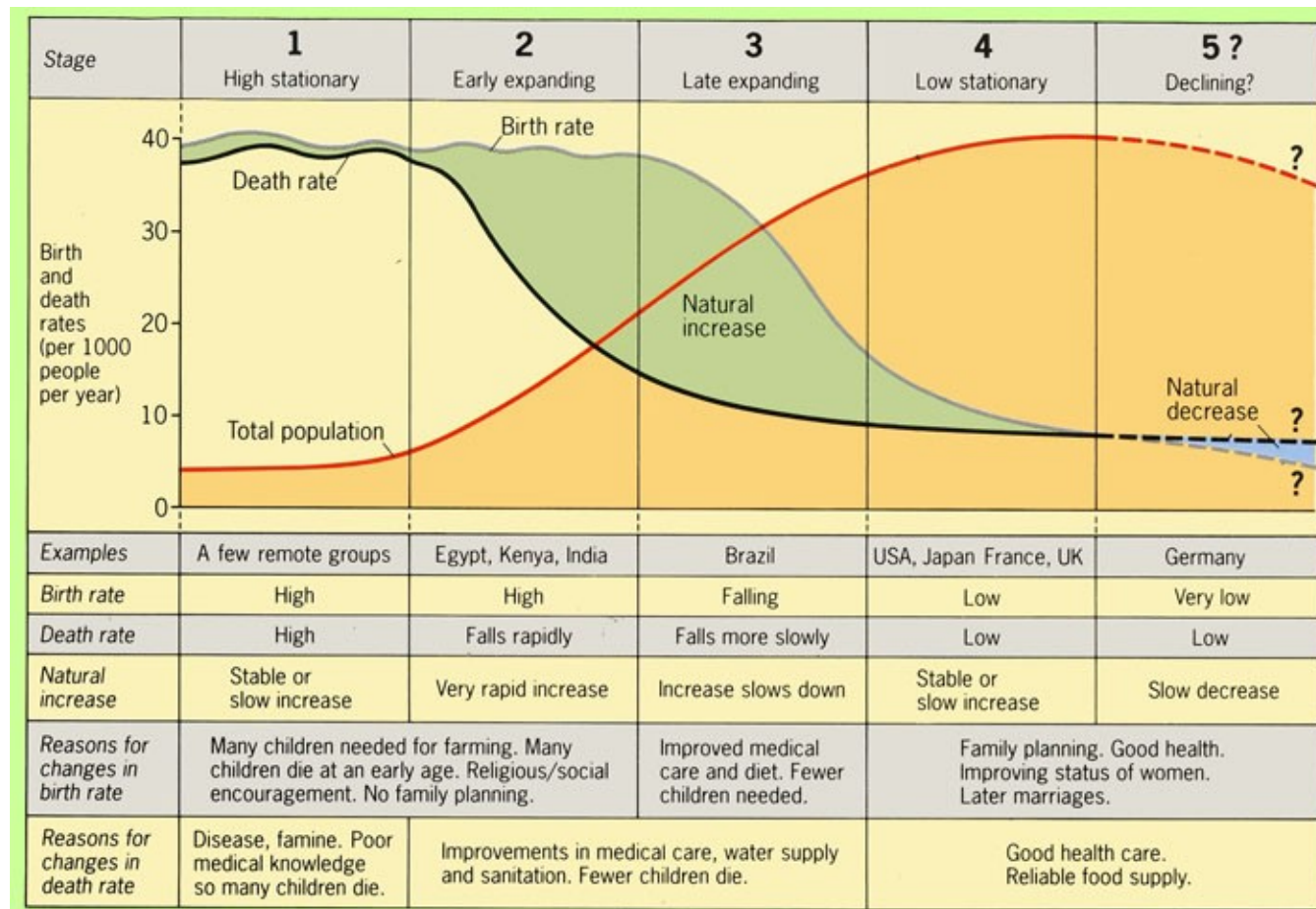
- 19 Which major factor allowed early humans to get to North America?

- A. Volcanic Eruptions
- B. Ice Age
- C. Major Heat Wave
- D. Tsunami

Master ID: 1952706 Revision: 2
Correct: B
Standards:
SOC.6.6 - W1.1.2

Directions: Read the passage below and answer the question(s) that follow.

Demographic Transition Model



20 Which **three** statements below describe Stage 4 on the Demographic Transition Model?

- A. low birth rates, low death rates
- B. very rapid rate of natural increase
- C. improving status of women
- D. reliable food supply
- E. poor medical knowledge

Master ID: 1952699 Revision: 2
 Correct: ACD
 Standards: SOC.6.6 - G1.2.3

Directions: Answer the following question(s) relating to the passage titled "Demographic Transition Model".

21 A country is moving from an agriculturally-based society to an industrial nation. There have been many improvements in healthcare and sanitation. As this country becomes more developed, the birth rate begins to fall and the death rate continues to fall but becomes more stable. In what stage of the Demographic Transition Model would this country fit?

- A. Stage 1
- B. Stage 2
- C. Stage 3
- D. Stage 4
- E. Stage 5

Master ID: 1952689 Revision: 3
Correct: C
Standards:
SOC.6.6 - G1.2.3

Directions: Answer the following question(s).

22 Is the following statement **true** or **false**?

Population growth rates are lower in less developed countries than they are in more developed countries.

- A. True
- B. False

Master ID: 1952684 Revision: 3
Correct: B
Standards:
SOC.6.6 - G1.2.6

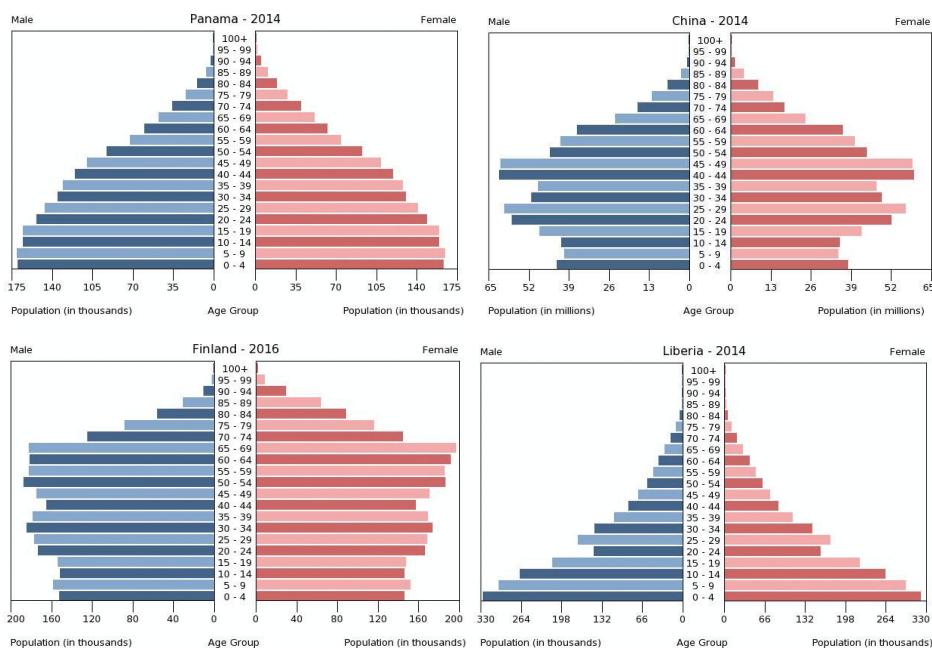
23 A country with rapid population growth will most likely have which of the following?

- A. too many "workers" and not enough "dependents"
- B. too many "dependents" and not enough "workers"
- C. high levels of technology

Master ID: 1952679 Revision: 3
Correct: B
Standards:
SOC.6.6 - G1.2.6

Directions: Answer the following question(s).

- 24 Review the four population pyramids. Read each statement below and select all that are correct.



- A. Finland has the largest number of people between the ages of 85 -89.
- B. Liberia will experience negative population growth in the future.
- C. China has more workers than dependents.
- D. Liberia has a higher dependent population than Finland.
- E. Panama has the most dependents under fifteen.
- F. Finland is likely to be a more developed country.

Master ID: 1952659 Revision: 4
 Correct: ACDF
 Standards: SOC.6.6 - G1.3.2

Directions: Answer the following question(s).

25

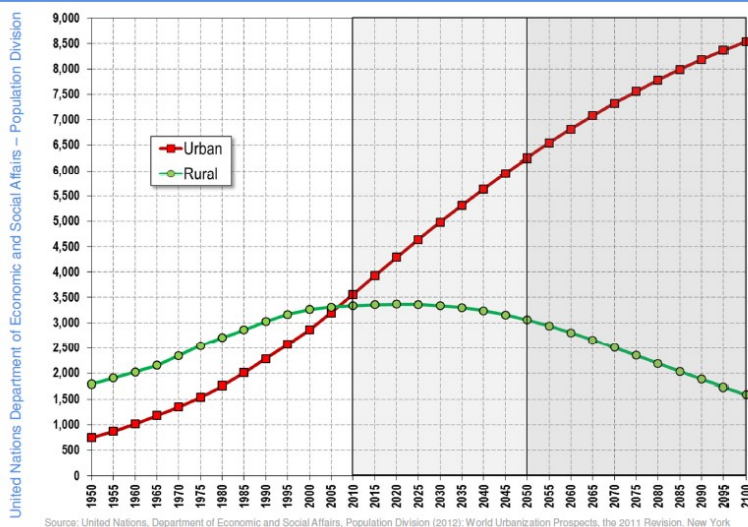


Directions: Answer the following question(s).



World: Urban and rural Population: 2010-2100

2



Using evidence from the artifacts provided, what is the greatest negative impact of urbanization?

Make a claim as to the most pressing issue, then support your claim with at least three examples from the artifacts as evidence.

As a concluding statement, suggest a way to improve living conditions in urban areas with specific details.

This response should be one quality paragraph.

Write your answer in the space below.

Directions: Answer the following question(s).

Master ID: 1952963 Revision: 2

Rubric: 4 Point(s)

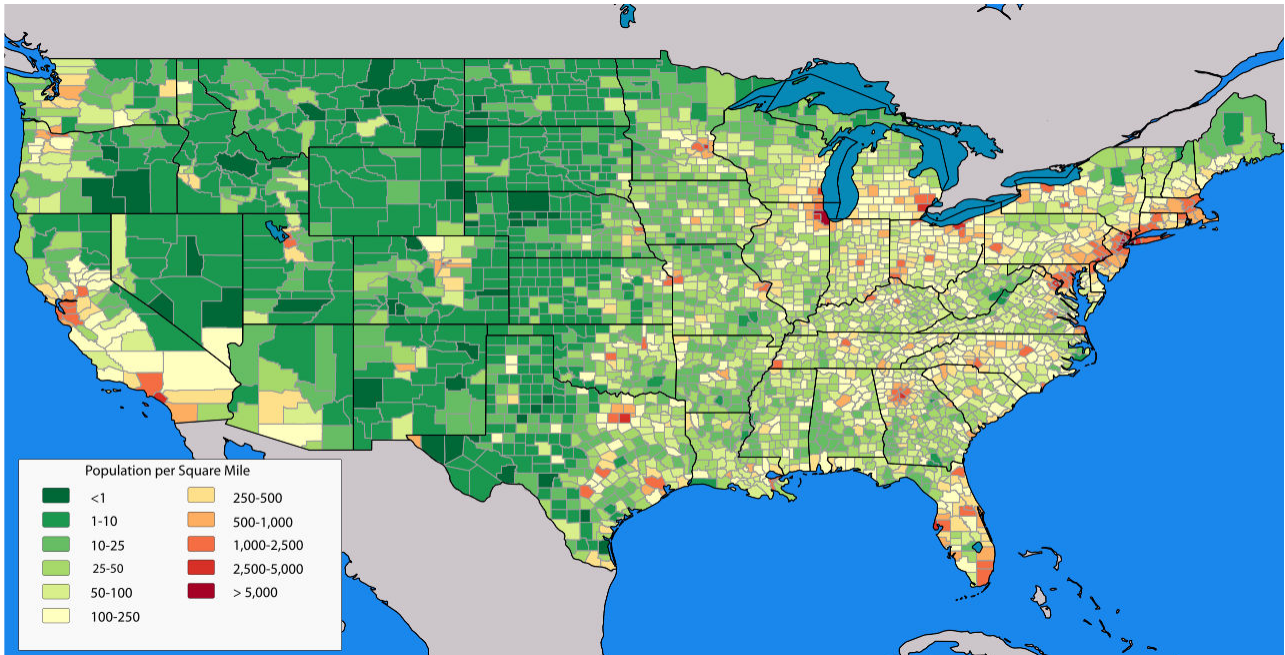
- 4 Strong topic sentence, includes 3 or more pieces of evidence (from artifacts provided) that support the main idea. Also contains a concluding statement.
- 3 Strong topic sentence, includes 3 or more pieces of evidence (from artifacts provided) that support the main idea.
- 2 Topic sentence, includes 2 pieces of evidence (from artifacts provided) that support the main idea.
- 1 Topic sentence, includes 1 or fewer pieces of evidence (from artifacts provided) that support the main idea.
- 0 Blank or unclear response

Standards:

SOC.6.6 - G1.2.4

Directions: Answer the following question(s).

26



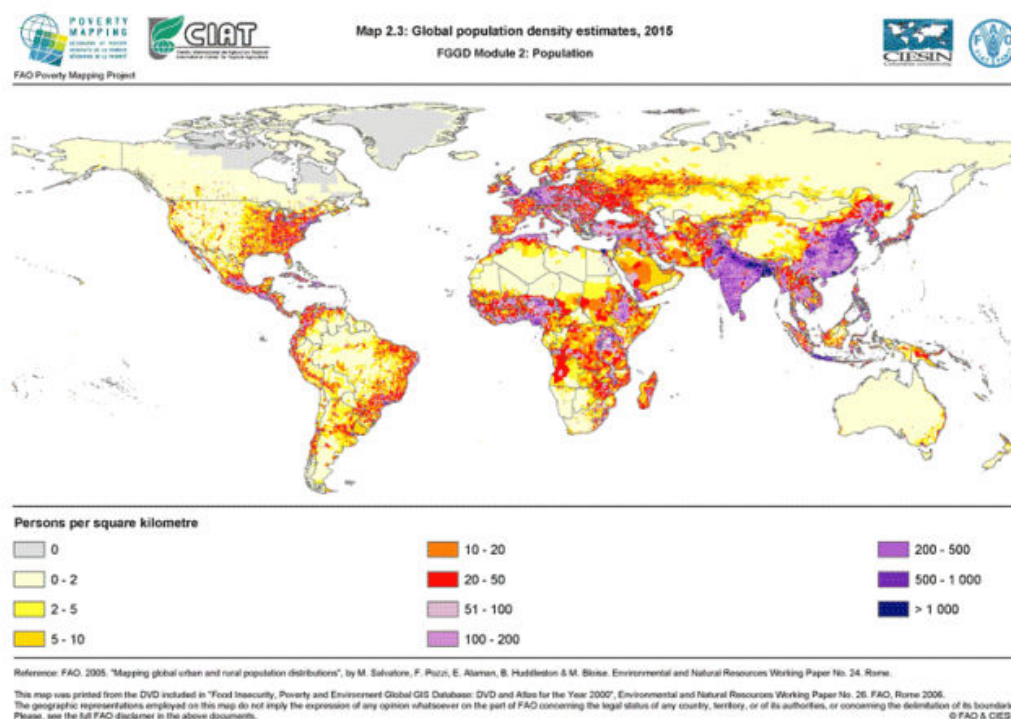
What is the cause behind the population density of the northeastern region of the United States?

- A. Cold climate
- B. Access to water
- C. Desert
- D. Rainforest

Master ID: 2954849 Revision: 2
Correct: B
Standards:
SOC.6.6 - G1.2.3

Directions: Answer the following question(s).

27



What is the cause of the population density of the northern region of Africa?

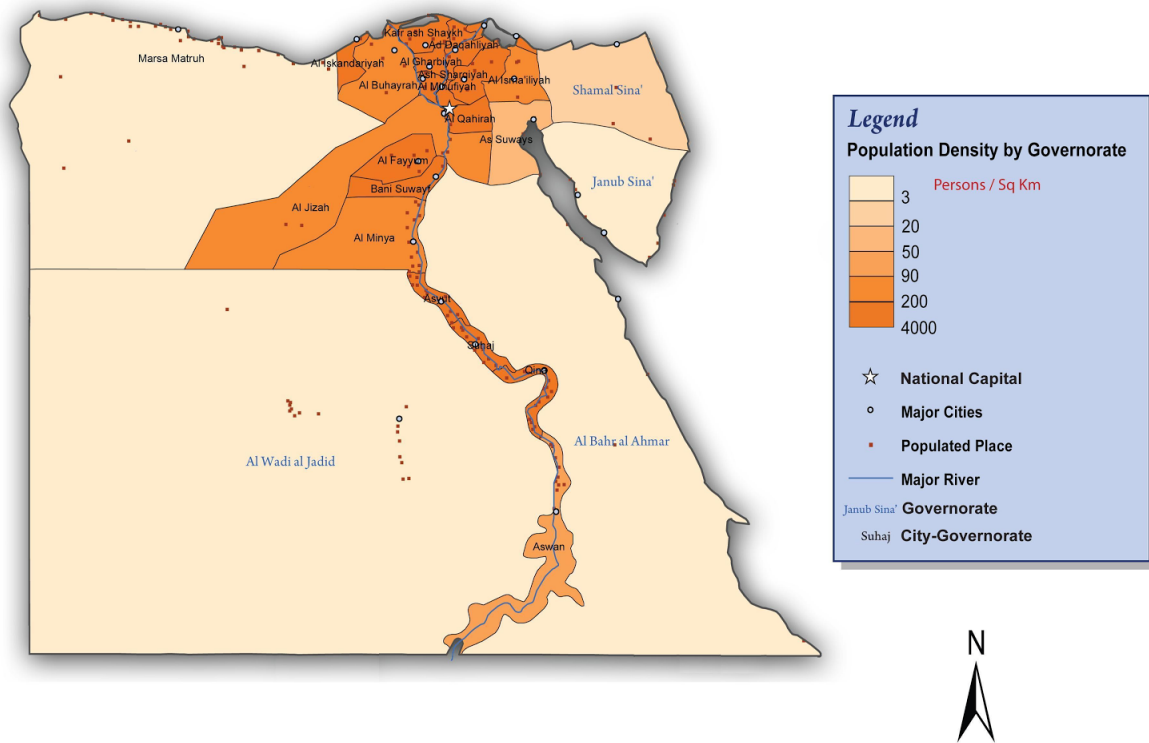
- A. Cold climate
- B. Mild climate
- C. Desert
- D. Rainforest

Master ID: 2954874 Revision: 1
Correct: C
Standards: SOC.6.6 - G1.2.3

Directions: Answer the following question(s).

28

Egypt: Population Centers & Density



100 50 0 100 200 300 Kilometers

Projection: Africa Albers Equal Area Conic
Central Meridian: 25° E
Standard Parallel 1: 20° N
Standard Parallel 2: 23° S

Author: The Original Uploader
Permissions: GFDL-self
Date Map Created: October 24th 2011
Data Source: World GIS Info 2004

Which of the following statements best describes the population density on this map?

- A. Most people in Egypt live near the coast of the Nile River.
- B. Egypt is more populated in the southern region.
- C. The population of Egypt is greater on all coastal areas.
- D. Major cities and populated places are located in the heart of Egypt.

Master ID: 2955017 Revision: 1
Correct: A
Standards:
SOC.6.6 - G1.3.2

Directions: Answer the following question(s).

29 Choose **two** of the following pieces of evidence that help to support the Land Bridge Theory.

- A. Artifacts show first humans came to the Americas around 12,000 years ago.
- B. Stone flakes and charred plants dated around 50,000 years old discovered.
- C. Research shows boats may have been used 25,000 to 40,000 years ago.
- D. Clovis points artifacts found near Clovis, New Mexico.
- E. People may have used boats to get to the Americas.
- F. Artifacts found in South Carolina.

Master ID: 2955003 Revision: 2

Correct: AD

Standards:
SOC.6.6 - H1.2.4